


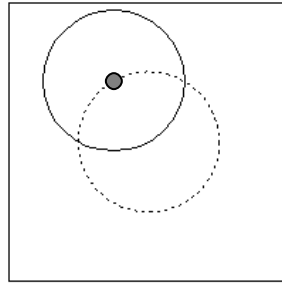
HOUGH TRANSFORM

Problem 6

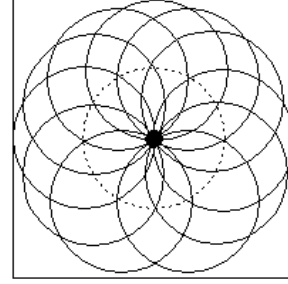
The following figures illustrates the principles of using the Hough Transform for circle detection. Assuming the circle's radius r is known, explain what you see in the plots (a, b, c).



a)



b)



c)